
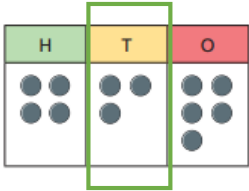

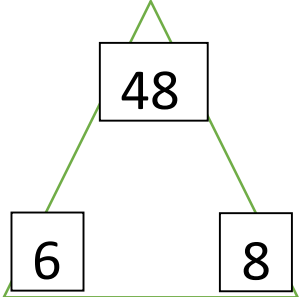


I can round numbers to the nearest 1000.	I know the place value of each digit - up to four-digit numbers.	I can rapidly recall multiplication and division facts for the 8 times tables.
<p>Round each number to the nearest 1000.</p> <p>3,500 <input type="text"/></p> <p>749 <input type="text"/></p> <p>2,260 <input type="text"/></p> <p>2,360 <input type="text"/></p> <p>Circle the three numbers that round to 9000 to the nearest 1000.</p> <p>8,600 8,590 8,340</p> <p>9,105 938 9,566</p>	<p>Write the value of each digit.</p> <p>3452</p> <p>9271</p> <p>4269</p> <p>1008</p>   	<p>Write the fact family.</p> <p>_____</p> <p>_____</p> <p>_____</p> <p>_____</p>  <p>Fill in the missing numbers in the box.</p> <p>5 X <input type="text"/> = 40</p> <p><input type="text"/> = 32 ÷ 8</p>
Score	Score	Score
Total Score:		

I can round numbers to the nearest 1000.	I know the place value of each digit - up to four-digit numbers.	I can rapidly recall multiplication and division facts for the 8 times tables.
--	--	--

Round each number to the nearest 1000.

3,800

367

1,250

2,860

Circle the three numbers that round to 8000 to the nearest 1000.

8,600 8,590 8,340

8,105 808 7,566


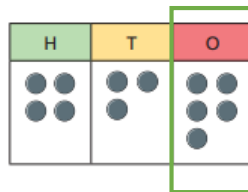

Write the value of each digit.

3492

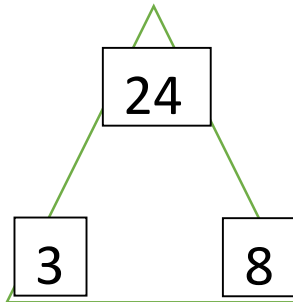
8271

4267

2006

Write the fact family.



Fill in the missing numbers in the box.


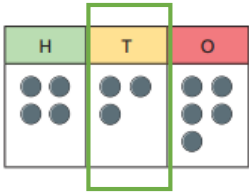

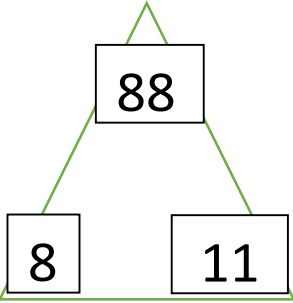
8 X = 16


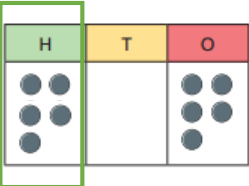

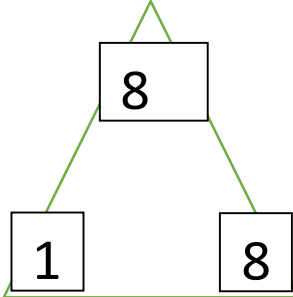
= 80 ÷ 8

Score	Score	Score
-------	-------	-------

--	--	--

Total Score:

I can round numbers to the nearest 1000.	I know the place value of each digit - up to four-digit numbers.	I can rapidly recall multiplication and division facts for the 8 times tables.
<p>Round each number to the nearest 1000.</p> <p>5,900 <input type="text"/></p> <p>3197 <input type="text"/></p> <p>250 <input type="text"/></p> <p>2,340 <input type="text"/></p> <p>Circle the three numbers that round to 5000 to the nearest 1000.</p> <p>4,600 5,190 4,340</p> <p>5,805 499 5,466</p>	<p>Write the value of each digit.</p> <p>34<u>8</u>2</p> <p><u>5</u>271</p> <p>426<u>1</u></p> <p>600<u>3</u></p>   	<p>Write the fact family.</p> <p>_____</p> <p>_____</p> <p>_____</p> <p>_____</p>  <p>Fill in the missing numbers in the box.</p> <p>8 X <input type="text"/> = 32</p> <p><input type="text"/> = 16 ÷ 8</p>
Score	Score	Score
Total Score:		

I can round numbers to the nearest 1000.	I know the place value of each digit - up to four-digit numbers.	I can rapidly recall multiplication and division facts for the 8 times tables.
<p>Round each number to the nearest 1000.</p> <p>3,900 <input type="text"/></p> <p>267 <input type="text"/></p> <p>3,290 <input type="text"/></p> <p>8,860 <input type="text"/></p> <p>Circle the three numbers that round to 3000 to the nearest 1000.</p> <p>3,900 3,290 2,940</p> <p>2,105 308 3,366</p>	<p>Write the value of each digit.</p> <p>3492</p> <p>8271</p> <p>4267</p> <p>2006</p>   	<p>Write the fact family.</p> <p>_____</p> <p>_____</p> <p>_____</p> <p>_____</p>  <p>Fill in the missing numbers in the box.</p> <p>8 X <input type="text"/> = 0</p> <p><input type="text"/> = 64 ÷ 8</p>
Score	Score	Score
Total Score:		